

Geometric Mean

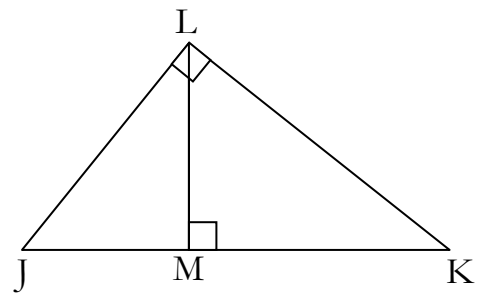
Name: _____ pd: _____

Find the Geometric Mean between:

1. 5 and 20 _____ 2. 64 and 49 _____ 3. 1 and 3 _____ 4. 100 and 6 _____
 5. 2 and 18 _____ 6. 3 and 27 _____ 7. 8 and 20 _____ 8. 5 and 10 _____

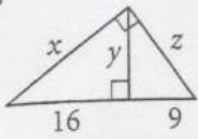
9-16: Refer to diagram

9. If $LM = 4$ and $MK = 8$, find JM _____
 10. If $LM = 6$ and $JM = 4$, find MK _____
 11. If $JM = 3$ and $MK = 6$, find LM _____
 12. If $JM = 4$ and $JK = 9$, find LK _____
 13. If $JM = 3$ and $MK = 9$, Find LJ _____
 14. If $JM = 3$ and $JL = 6$, find MK _____
 15. If $JL = 9$ and $JM = 6$, find MK _____
 16. If $LK = 7$ and $MK = 6$, find JM _____

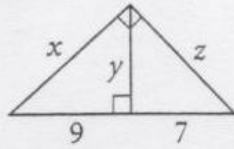


17 – 32: Find the values of x , y , & z

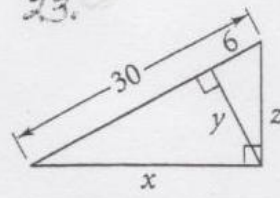
21.



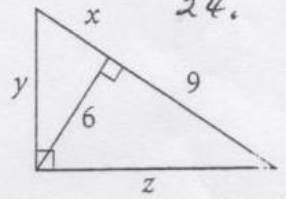
22.



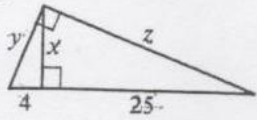
23.



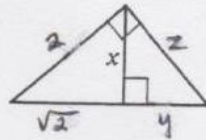
24.



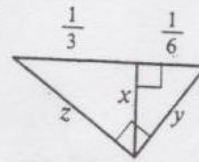
25.



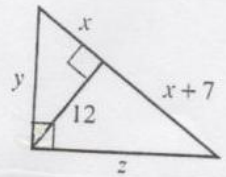
26.



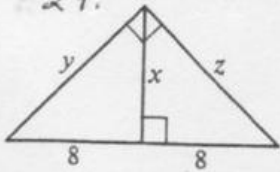
27.



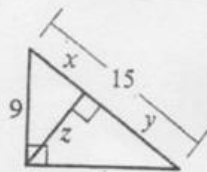
28.



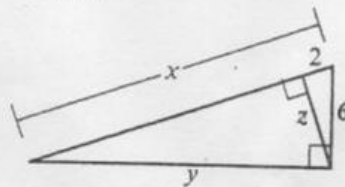
29.



30.



31.



32.

